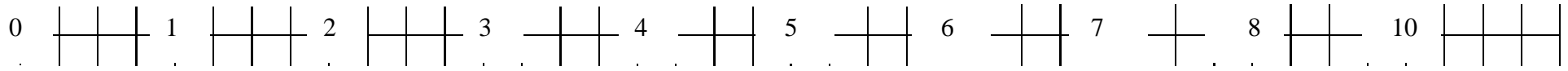


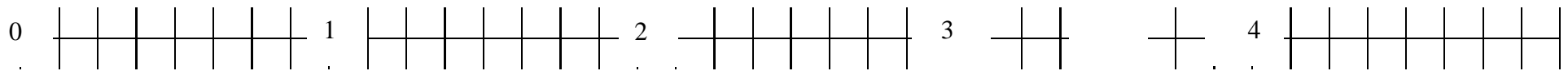
Name

Date

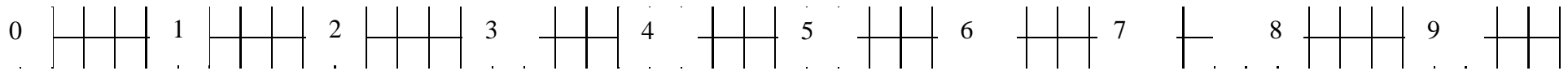
Number each point on this number line using quarters.



Number each point on this number line using eighths.



Number each point on this number line using fifths.



Number each point on this number line using tenths.

