

Name: _____


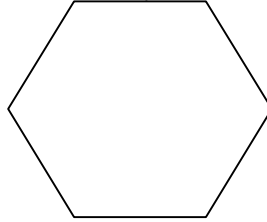
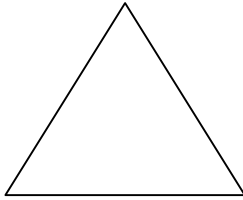
Date: _____



Fun Fractions

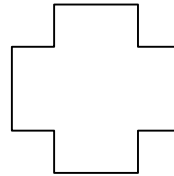




1. Colour half ($\frac{1}{2}$) of the shapes below



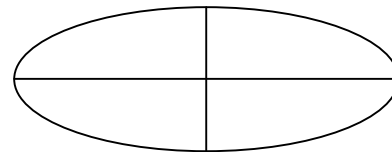

2. What is half of 8?

3. Colour $\frac{1}{4}$ (one quarter) of the shapes below



4. If I have 10 sweets and give you half how many did I give you?

5. Colour $\frac{3}{4}$ of these shapes:



6. There are 6 Jelly Babies in a packet, how many are there in $\frac{1}{2}$ of a packet?

7. What is $\frac{1}{4}$ of 8?

Name: _____

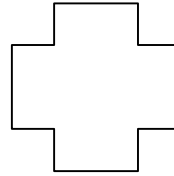


Date: _____



Fun Fractions



1. Colour $\frac{1}{2}$ of the shapes below



2. Teddy Bears are on special offer, they normally cost £2.00 each but have been reduced to half price. How much will a teddy bear cost now?

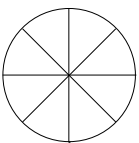
3. There are 20 seeds in a packet. How many seeds are there in $\frac{1}{2}$ of the packet?

4. There are 20 Jelly Babies in a packet, how many are there in $\frac{1}{4}$ of a packet?

5. If Sally has $\frac{1}{2}$ of a chocolate bar, and Sam has a $\frac{1}{4}$ of the same chocolate bar, who has the most chocolate, Sally or Sam?
(which is bigger - a quarter or a half?)

6. A large chocolate cake weighs 50g. How much does half of the cake weigh?

7. A pizza has been divided into 8 equal slices. Sam eats one quarter of the pizza. How many slices did he eat?



Name: _____

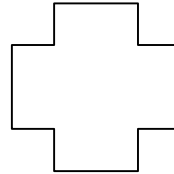


Date: _____



Fun Fractions



1. Colour $\frac{1}{4}$ of the shapes below



2. Teddy Bears are on special offer, they normally cost £2.00 each but have been reduced to half price. How much will a teddy bear cost now?

3. There are 40 seeds in a packet. How many seeds are there in $\frac{1}{4}$ of the packet?

4. If a half of a packet of Jelly Babies is 45 sweets, how many are there in a whole packet?

5. If Sally has $\frac{1}{2}$ of a chocolate bar, and Sam has a $\frac{1}{4}$ of the same chocolate bar, who has the most chocolate, Sally or Sam?

(which is bigger - a quarter or a half?)

6. A large chocolate cake weighs 800g. How much does half of the cake weigh?

7. A pizza has been divided into 8 equal slices. Sam eats three quarters of the pizza how many slices are left?

